


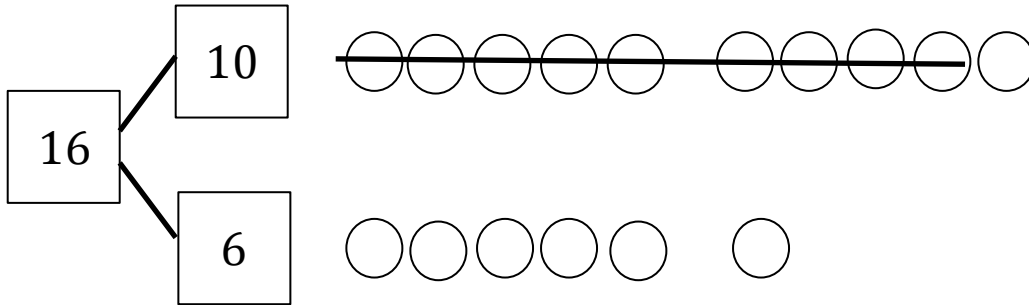
Name _____

Date _____

Make a simple math drawing. Cross out from the 10 ones or the other part, in order to show what happens in the stories.

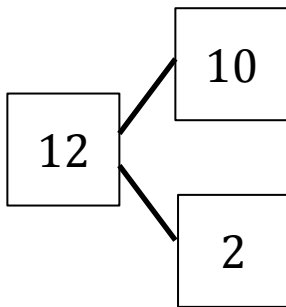


1. Mikey the Monkey has 16 grapes. 10 are on the vine and 6 are on the ground. Mikey eats 9 grapes from the vine. How many grapes does Mikey have left?



Mikey has _____ grapes now.

2. 12 frogs are in the pond. 10 are on a lily pad and 2 are in the water. 9 frogs hop off the lily pad and out of the pond. How many frogs are in the pond?



There are _____ frogs in the pond now.