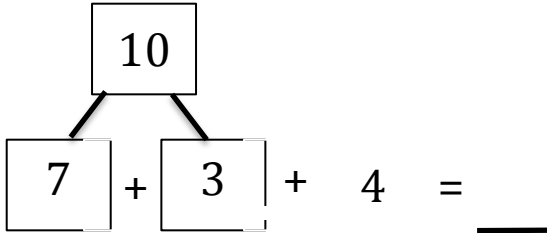
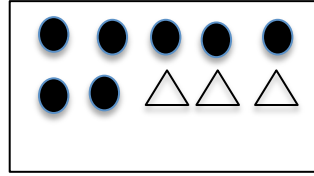


Name \_\_\_\_\_

Date \_\_\_\_\_

Circle the numbers that make ten. Draw a picture. Complete the number sentence.

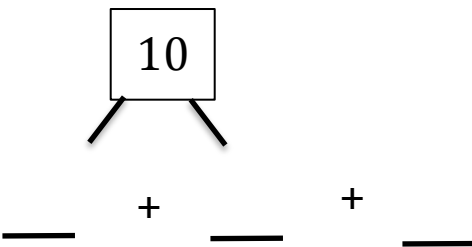
1.  $(7) + (3) + 4 = \square$



$10 + \underline{\quad} = \underline{\quad}$



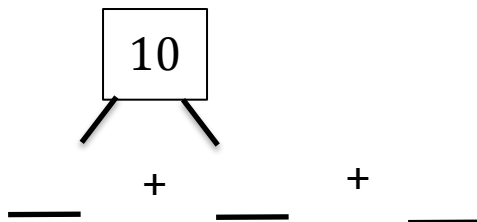
2.  $9 + 1 + 4 = \square$



$10 + \underline{\quad} = \underline{\quad}$



3.  $5 + 6 + 5 = \square$



$10 + \underline{\quad} = \underline{\quad}$